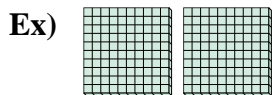




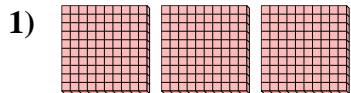
Use the blocks to determine the total quantities.

**Answers**



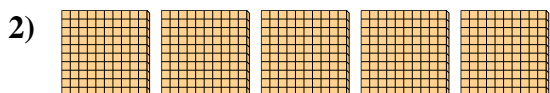
  2   hundreds =   20   tens =  200  ones

Ex.   2     20    200 




       hundreds =        tens =        ones

1. \_\_\_\_\_



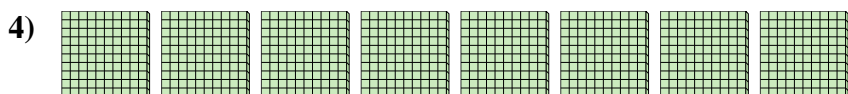
       hundreds =        tens =        ones

2. \_\_\_\_\_




       hundreds =        tens =        ones

3. \_\_\_\_\_



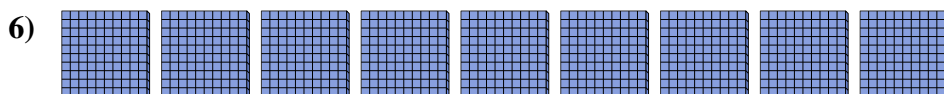
       hundreds =        tens =        ones

4. \_\_\_\_\_



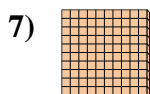
       hundreds =        tens =        ones

5. \_\_\_\_\_



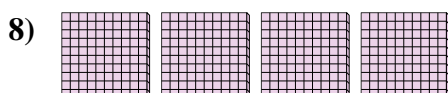
       hundreds =        tens =        ones

6. \_\_\_\_\_



       hundreds =        tens =        ones

7. \_\_\_\_\_




       hundreds =        tens =        ones


8. \_\_\_\_\_




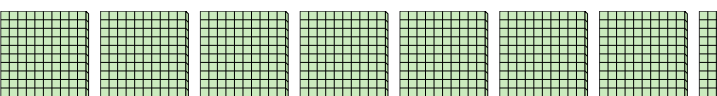
Use the blocks to determine the total quantities.


Ex)   
2 hundreds = 20 tens = 200 ones

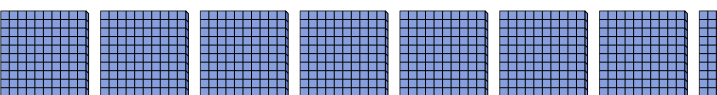
1)   
3 hundreds = 30 tens = 300 ones

2)   
5 hundreds = 50 tens = 500 ones


3)   
7 hundreds = 70 tens = 700 ones

4)   
8 hundreds = 80 tens = 800 ones

5)   
6 hundreds = 60 tens = 600 ones

6)   
9 hundreds = 90 tens = 900 ones

7)   
1 hundreds = 10 tens = 100 ones

8)   
4 hundreds = 40 tens = 400 ones

Answers

Ex.	<u>2</u>	<u>20</u>	<u>200</u>
1.	<u>3</u>	<u>30</u>	<u>300</u>
2.	<u>5</u>	<u>50</u>	<u>500</u>
3.	<u>7</u>	<u>70</u>	<u>700</u>
4.	<u>8</u>	<u>80</u>	<u>800</u>
5.	<u>6</u>	<u>60</u>	<u>600</u>
6.	<u>9</u>	<u>90</u>	<u>900</u>
7.	<u>1</u>	<u>10</u>	<u>100</u>
8.	<u>4</u>	<u>40</u>	<u>400</u>